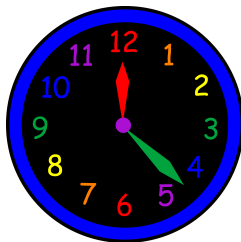


Mental Warm up - listen and sing along to the following song:

[https://www.youtube.com/watch?v=\\_awKIEMyleA](https://www.youtube.com/watch?v=_awKIEMyleA)



Well done on the work completed yesterday on telling the time to O'clock. Now let's have a go at telling the time to half-past the hour.



WALT tell the time to half past

Watch these clips to remind you!

<https://www.youtube.com/watch?v=r-rayva-GluMY>

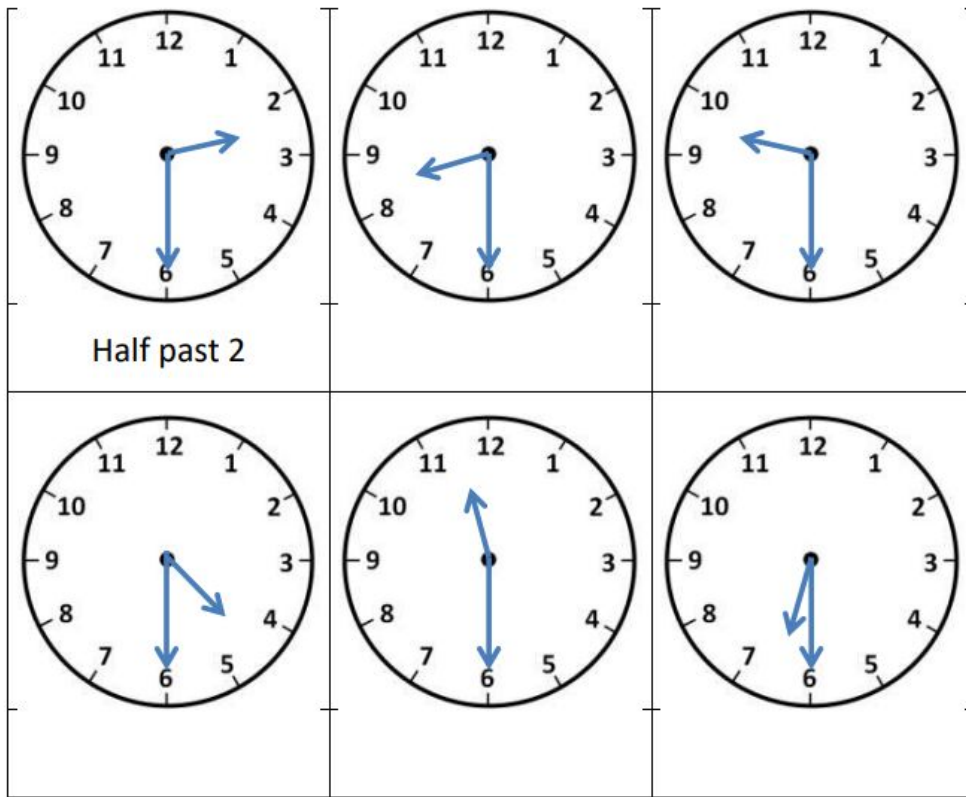
<https://www.youtube.com/watch?v=MaVg-BjVh4b8&t=99s>



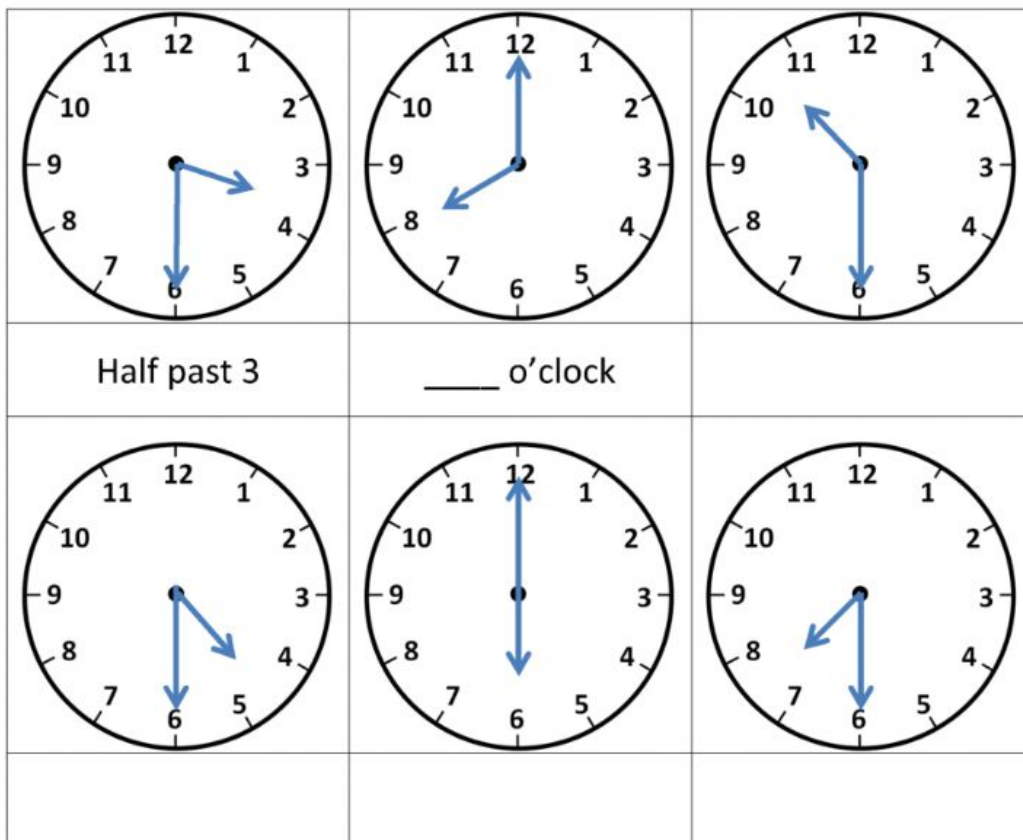
Remember:

- The short hand tells the hour
- The long hand tells the minute
- We always say O'clock on the hour
- When the long hand is on 6 we say half past (the hour the short hand is pointing to)
- Sometimes we can say 30 instead of half past

Now have a go at reading these analogue clocks and writing the answers in your purple books. The first one has done for you.



Now have a go at this mixed clocks.



**Challenge:**

Now draw a clock showing half past 5