

Mental Warm up - listen and sing along to the following song:

<https://www.youtube.com/watch?v=3tx0rvuXIRg>

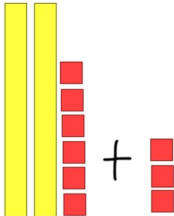
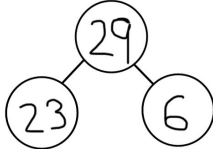
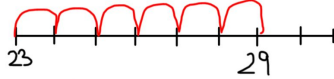
WALT add a single digit to a two digit number within 50

$$23 + 6 = \underline{\quad}$$

Q. How would you solve this?

Q. What pictures could you draw?

Tens and ones? Part Part Whole model? A blank number line?

Tens and Ones	Part Part Whole Model	A blank number line
		

Copy and complete the following in your purple book. You can choose one of the methods that we have learnt in class, as above, or do it your own way.

1.  $31 + 6 = \underline{\quad}$

2.  $40 + 7 = \underline{\quad}$

3.  $12 + 5 = \underline{\quad}$

4.  $25 + 5 = \underline{\quad}$

5.  $36 + 3 = \underline{\quad}$

6.  $16 + 2 = \underline{\quad}$

**Now have a go at writing your own.**

Don't forget to login to Mangahigh for today's task

(login details were sent home in envelopes)