

Wednesday 1st April

Mental Maths

WALT: Divide by 2

Tommy and Annie have some counters.

Tommy shares his counters into 2 equal groups.

He has 15 in each group.

Annie groups her counters in twos.

She has 19 groups.

Who has more counters and by how many?

How did you work it out?



Answer key:

Tommy has 30 counters.

Annie has 38 counters.

Annie has 8 more.



Children could have compared 15 and 19 and realised they could have done 2×4

WALT: Subtract two 2 digit numbers

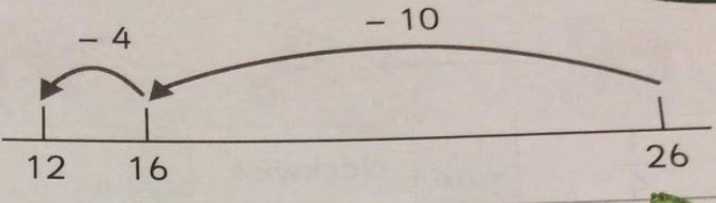
Remind children to jump back in 10s and then 1s from the larger number as shown in the example. Children to draw their number lines into their books and answer the questions.


Frog subtraction
Subtract two 2-digit numbers

date: _____


 

$26 - 14 = 12$




_____ 


$38 - 25 = \square$

_____ 


$49 - 17 = \square$

_____ 


$34 - 18 = \square$

_____ 

$52 - 25 = \square$

_____ 

$73 - 47 = \square$

_____ 

Teacher's notes

Children use the number line beside each calculation to help them work out the answer.