

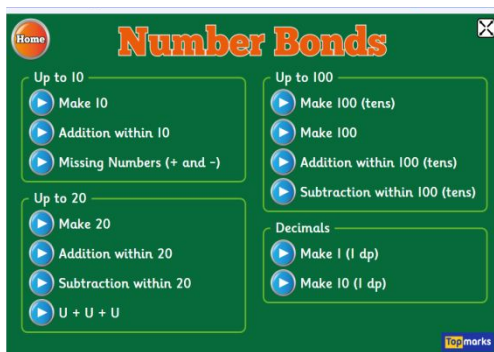
Wednesday 8th July 2020

Add and subtract mass

Mental maths

Click on the link below for a fun warm-up. Choose the number bonds that you would like to practice today.

<https://www.topmarks.co.uk/maths-games/hit-the-button>



Main Lesson

Watch the video Year 3 WB 06.07.20 Lesson 3

<https://vimeo.com/434623103>

Complete the worksheet

<https://resources.whiterosemaths.com/wp-content/uploads/2020/06/Lesson-3-Add-and-subtract-mass.pdf>

Add and subtract mass

1 Teddy is measuring the weight of some fruit.

a) What is the weight of the apple? g

b) What is the weight of the banana? g

3 Ron is measuring the mass of some objects in the classroom.

Ron puts both objects on the same scale.
What is the total mass of the objects? kg and g

4 Aisha is weighing out some cereal.
First she puts the bowl on the scales. Then she pours out some cereal.

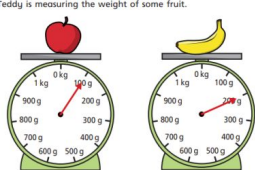
Now check your answers

<https://resources.whiterosemaths.com/wp-content/uploads/2020/06/Lesson-3-Answers-Add-and-subtract-mass.pdf>


Answer sheet

Add and subtract mass

1 Teddy is measuring the weight of some fruit.



2 Ron is measuring



Ron puts both obj
What is the total