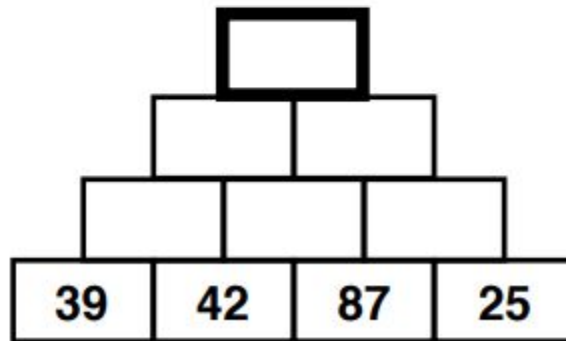
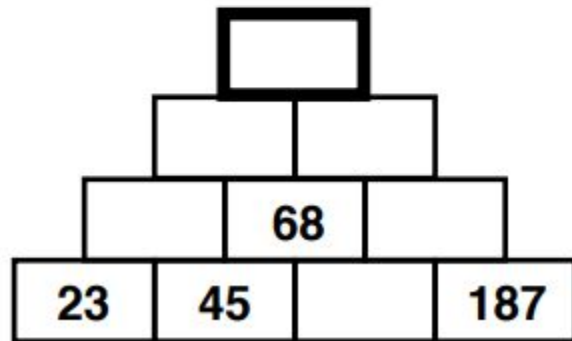
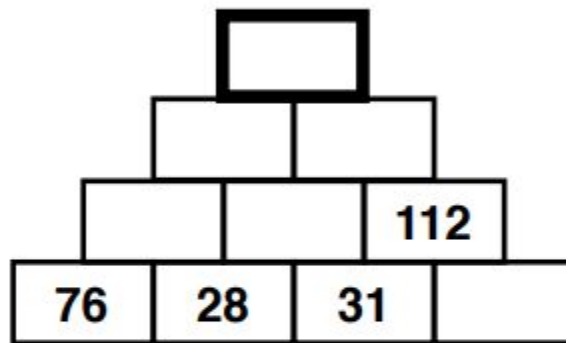
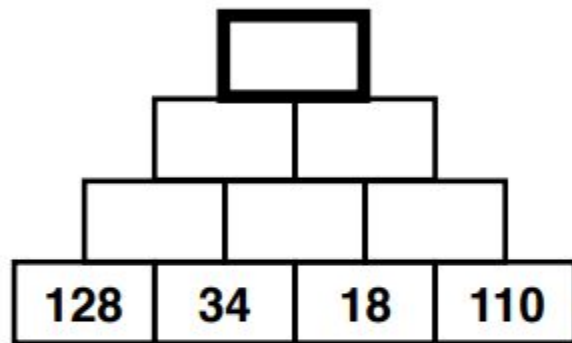


Hola niñas/niños

Happy Wednesday! We are starting the lesson with our brain teaser. This is similar to the pyramid challenge done last Monday.

# Maths Brain Teaser - 9

Add two adjoining numbers and write the total in the box above.



## **WALT - reason about 3d shapes.**

Yesterday you looked at 3d shapes and nets. Can you predict which nets will make a cube?

Click on the link and try the challenge

<https://www.nctm.org/Classroom-Resources/Illuminations/Interactives/Cube-Nets/>

Now try this game. Can you name the 3d shapes?

<http://www.snappymaths.com/other/shapeandspace/3dshapes/interactive/3dshapeimm/3dshapeimm.htm>

Lastly, try the shape splat game. Remember to focus on 3d shapes if you can.

<http://www.sheppardsoftware.com/math/geometry/shapes-splat-game/>

Brain Teaser answers

9.

