

Thursday 18th June 2020

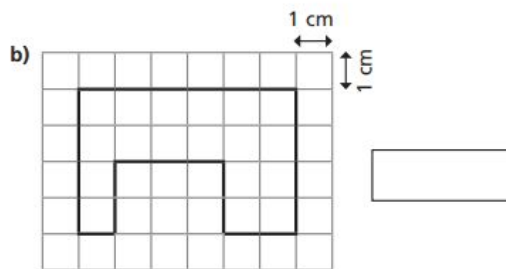
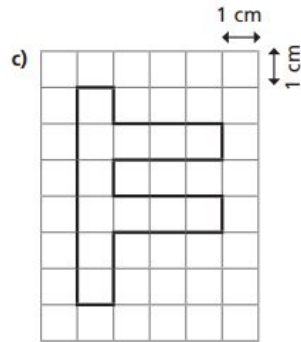
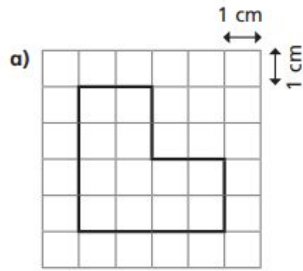
Maths

WALT: Calculate the area of 2D Shapes

Arithmetic practise:

$\begin{array}{r} 835 \\ + 655 \\ \hline \end{array}$	$\begin{array}{r} 246 \\ + 846 \\ \hline \end{array}$	$\begin{array}{r} 920 \\ - 756 \\ \hline \end{array}$	$\begin{array}{r} 137 \\ + 346 \\ \hline \end{array}$	$\begin{array}{r} 505 \\ + 516 \\ \hline \end{array}$
$\begin{array}{r} 798 \\ + 842 \\ \hline \end{array}$	$\begin{array}{r} 185 \\ + 684 \\ \hline \end{array}$	$\begin{array}{r} 753 \\ - 205 \\ \hline \end{array}$	$\begin{array}{r} 595 \\ + 519 \\ \hline \end{array}$	$\begin{array}{r} 174 \\ + 492 \\ \hline \end{array}$
$\begin{array}{r} 772 \\ + 175 \\ \hline \end{array}$	$\begin{array}{r} 213 \\ - 108 \\ \hline \end{array}$	$\begin{array}{r} 720 \\ - 435 \\ \hline \end{array}$	$\begin{array}{r} 664 \\ - 488 \\ \hline \end{array}$	$\begin{array}{r} 401 \\ - 303 \\ \hline \end{array}$

- 1 On the grid, the area of each square is 1 cm^2 . Calculate the area of each shape.



Answers

$$\begin{array}{r} 835 \\ + 655 \\ \hline 1490 \end{array}$$

$$\begin{array}{r} 246 \\ + 846 \\ \hline 1092 \end{array}$$

$$\begin{array}{r} 920 \\ - 756 \\ \hline 164 \end{array}$$

$$\begin{array}{r} 137 \\ + 346 \\ \hline 483 \end{array}$$

$$\begin{array}{r} 505 \\ + 516 \\ \hline 1021 \end{array}$$

$$\begin{array}{r} 798 \\ + 842 \\ \hline 1640 \end{array}$$

$$\begin{array}{r} 185 \\ + 684 \\ \hline 869 \end{array}$$

$$\begin{array}{r} 753 \\ - 205 \\ \hline 548 \end{array}$$

$$\begin{array}{r} 595 \\ + 519 \\ \hline 1114 \end{array}$$

$$\begin{array}{r} 174 \\ + 492 \\ \hline 666 \end{array}$$

$$\begin{array}{r} 772 \\ + 175 \\ \hline 947 \end{array}$$

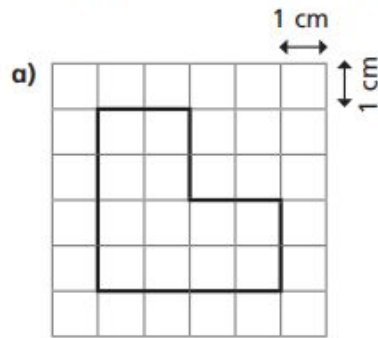
$$\begin{array}{r} 213 \\ - 108 \\ \hline 105 \end{array}$$

$$\begin{array}{r} 720 \\ - 435 \\ \hline 285 \end{array}$$

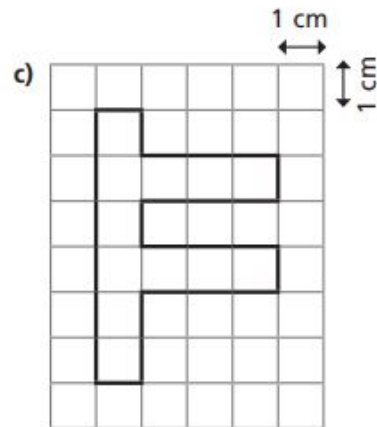
$$\begin{array}{r} 664 \\ - 488 \\ \hline 176 \end{array}$$

$$\begin{array}{r} 401 \\ - 303 \\ \hline 98 \end{array}$$

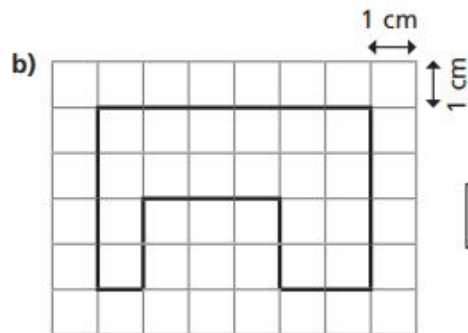
- 1 On the grid, the area of each square is 1 cm^2
Calculate the area of each shape.



12 cm^2



12 cm^2



18 cm^2