


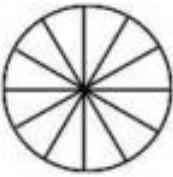

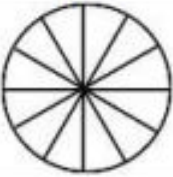
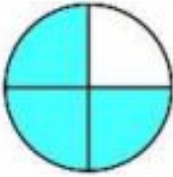








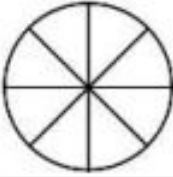
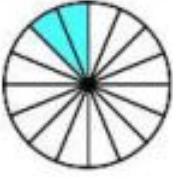





Friday 24th April 2020

Maths - Fractions

WALT: Identify, name and write equivalent fractions of a given fraction.

Activity 1:

1)		=		6)		=	
	$\frac{3}{5}$		$\frac{6}{10}$		—		—
2)		=		7)		=	
	—		—		—		—
3)		=		8)		=	
	—		—		—		—
4)		=		9)		=	
	—		—		—		—
5)		=		10)		=	
	—		—		—		—

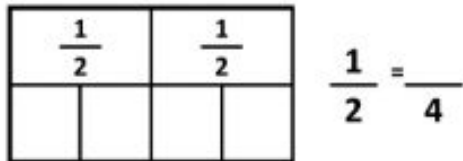
Activity 2:

Use these fractions strips to help you find the equivalent fractions.

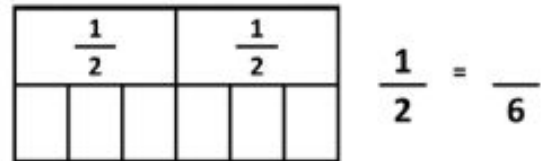
Put the correct fraction into the box and fill in the answers below.



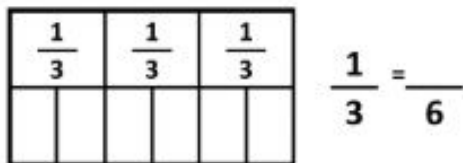
1)



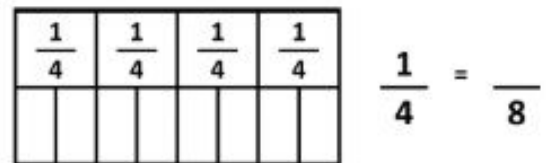
2)



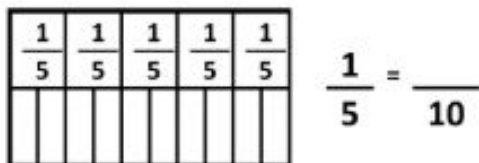
3)



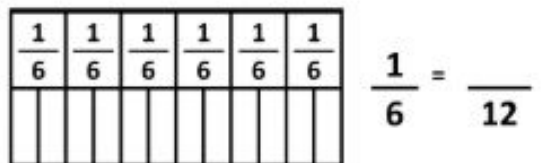
4)



5)



6)


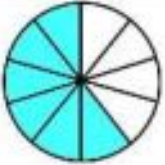



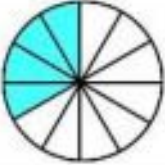
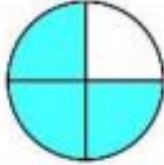









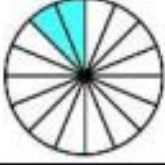

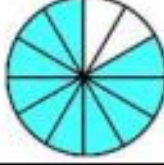



Now use the fraction walls to answer these questions.

7) $\frac{2}{2} = \frac{\quad}{4}$ 8) $\frac{3}{4} = \frac{\quad}{8}$ 9) $\frac{2}{3} = \frac{\quad}{6}$ 10) $\frac{2}{5} = \frac{\quad}{10}$

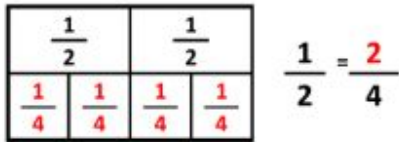
11) $\frac{3}{3} = \frac{\quad}{6}$ 12) $\frac{4}{6} = \frac{\quad}{12}$ 13) $\frac{4}{5} = \frac{\quad}{10}$ 14) $\frac{5}{6} = \frac{\quad}{12}$

Activity 1 Answers:

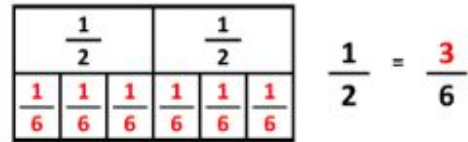
1)		=		6)		=	
	$\frac{3}{5}$		$\frac{6}{10}$		$\frac{2}{3}$		$\frac{8}{12}$
2)		=		7)		=	
	$\frac{2}{6}$		$\frac{4}{12}$		$\frac{3}{4}$		$\frac{12}{16}$
3)		=		8)		=	
	$\frac{8}{10}$		$\frac{4}{5}$		$\frac{4}{5}$		$\frac{8}{10}$
4)		=		9)		=	
	$\frac{6}{14}$		$\frac{3}{7}$		$\frac{6}{16}$		$\frac{3}{8}$
5)		=		10)		=	
	$\frac{2}{16}$		$\frac{1}{8}$		$\frac{10}{12}$		$\frac{5}{6}$

Activity 2 Answers:

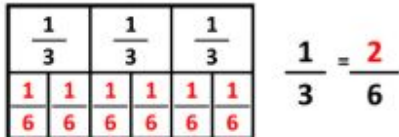
1)



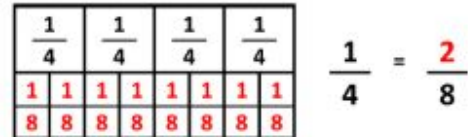
2)



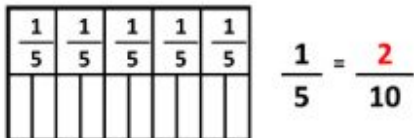
3)



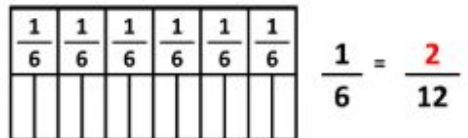
4)



5)



6)



Now use the fraction walls to answer these questions.

7) $\frac{2}{2} = \frac{4}{4}$ 8) $\frac{3}{4} = \frac{6}{8}$ 9) $\frac{2}{3} = \frac{4}{6}$ 10) $\frac{2}{5} = \frac{4}{10}$

11) $\frac{3}{3} = \frac{6}{6}$ 12) $\frac{4}{6} = \frac{8}{12}$ 13) $\frac{4}{5} = \frac{8}{10}$ 14) $\frac{5}{6} = \frac{10}{12}$