



Today is Thursday

Today we are going to look at writing maths questions.

Ali has 3 sweets



Sally has 4 sweets





How many do they have **altogether**?

Altogether means add.

3 sweets + 4 sweets =

Now count them all

$$3+4=7$$



Remember:

1. Draw the pictures
2. Write the addition sentence
3. Count altogether

Your turn:


1.



Susan has 2 cats

Mohammed has 3 cats

How many cats do they have altogether?

Follow the steps





2.

Kira has 1 carrot

Chris has 5 carrots

How many carrots do they have altogether?

Follow the steps

Now try this game: <https://www.topmarks.co.uk/addition/robot-addition>

Match the questions to the answers

3	4	5	6	7

