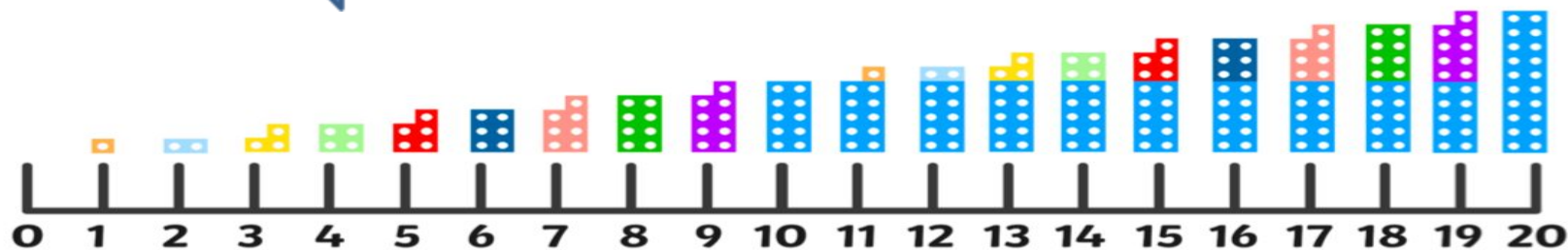


Today is

THURSDAY

The focus today is subtraction using number line



My 0 to 20
number line

twinkl www.twinkl.co.uk

Remember to first find the given number on the number line
count left to find the answer

Hungry Henry the Caterpillar – Counting Back

Henry the caterpillar is very hungry! He has found a beautiful flower with 10 petals and is eating some of the petals, one by one. How many are left?


How many leaves did Henry eat?

Can you write the subtraction sentence?



Examples of subtraction using number line

Boris the bat had some friend over but 3 of them had to leave. How many bats are left?

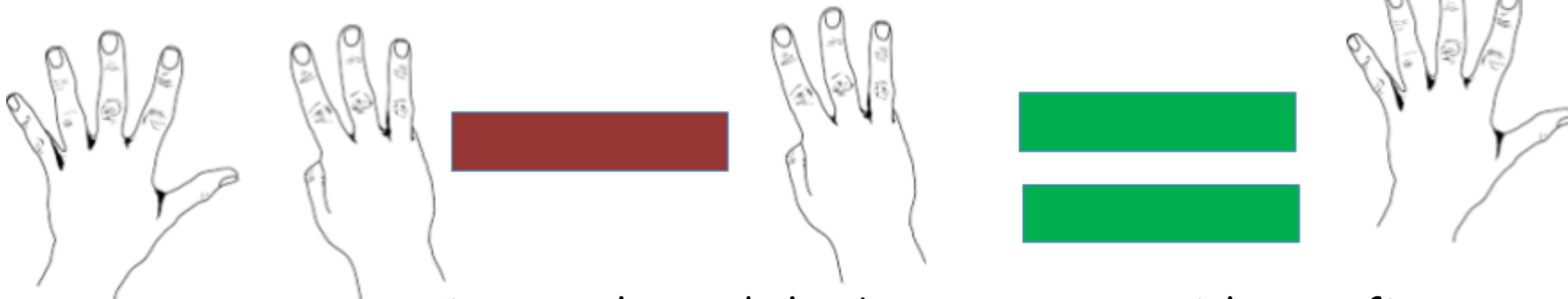


Steps:

- Count how many bats there are altogether (8)
- Find the total on the number line
- Count back from 8 the number of bats that left (3)
- The number you stop on is the answer



Can you check the answer with your fingers?



Use number line to solve and check your answers with your fingers

Sam had 10p, she bought a banana for 6p. How much change will she receive?

Tom had 10p, he gave his brother 5p. How much money does Tom have left?

6p

5p

Challenge:

$10p - 8p =$

$8p - 5p =$

$4p - 2p =$



Click the links below to practices more subtraction

<https://www.topmarks.co.uk/money/toy-shop-money>

<https://natwest.mymoneysense.com/students/students-5-8/the-change-game/>

Click on the links below to find other ways we can solve subtraction

<https://www.youtube.com/watch?v=61oXpLWzqpw>

<https://www.youtube.com/watch?v=sSTbl9S8OQY>

<https://www.youtube.com/watch?v=1tGMotjBaG4>

<https://www.youtube.com/watch?v=bnBeGmjWnK4>